



Maak groepjes van 2 en schrijf de tafelsom en het antwoord op.




$$\underline{3} \times \underline{2} = \underline{6}$$




$$\underline{\quad} \times \underline{\quad} = \underline{\quad}$$




$$\underline{\quad} \times \underline{\quad} = \underline{\quad}$$




$$\underline{\quad} \times \underline{\quad} = \underline{\quad}$$




$$\underline{\quad} \times \underline{\quad} = \underline{\quad}$$



$$\underline{\quad} \times \underline{\quad} = \underline{\quad}$$



$$\underline{\quad} \times \underline{\quad} = \underline{\quad}$$



$$\underline{\quad} \times \underline{\quad} = \underline{\quad}$$




$$\underline{\quad} \times \underline{\quad} = \underline{\quad}$$




$$\underline{\quad} \times \underline{\quad} = \underline{\quad}$$


Maak groepjes van 2 en schrijf de tafelsom en het antwoord op.




$$\underline{3} \times \underline{2} = \underline{6}$$




$$\underline{1} \times \underline{2} = \underline{2}$$




$$\underline{10} \times \underline{2} = \underline{20}$$



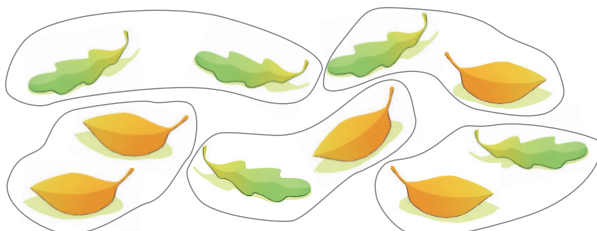
$$\underline{4} \times \underline{2} = \underline{8}$$



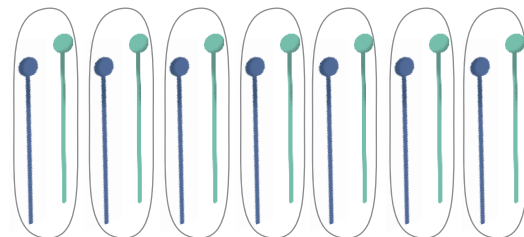
$$\underline{2} \times \underline{2} = \underline{4}$$




$$\underline{9} \times \underline{2} = \underline{18}$$




$$\underline{5} \times \underline{2} = \underline{10}$$



$$\underline{7} \times \underline{2} = \underline{14}$$



$$\underline{6} \times \underline{2} = \underline{12}$$



$$\underline{8} \times \underline{2} = \underline{16}$$