



# Omtrek berekenen

Rekenen

Naam: .....

Groep: .....

## Wat ga je oefenen?

- Berekenen van de omtrek



Gebruik bij het oefenen de artikelen over **het berekenen van de omtrek**

Wat is de omtrek? Schrijf op.

6 cm



7 cm

..... cm

8 cm



8 cm

..... cm

8 cm



3 cm

..... cm

7 cm



4 cm

..... cm

5 cm



4 cm

..... cm

4 cm



9 cm

..... cm

3 cm



3 cm

..... cm

12 cm



7 cm

..... cm

9 cm



2 cm

..... cm

11 cm



4 cm

..... cm

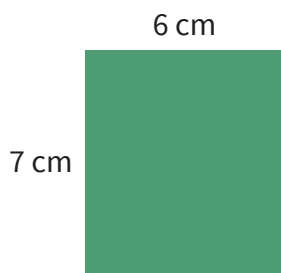
#### Wat ga je oefenen?

- Berekenen van de omtrek

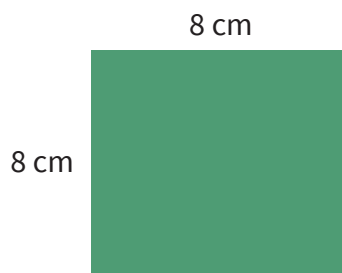


Gebruik bij het oefenen de artikelen over **het berekenen van de omtrek**


Wat is de omtrek? Schrijf op.




...26... cm



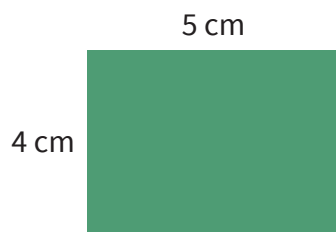
...32... cm



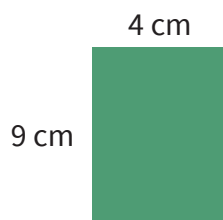
...22... cm



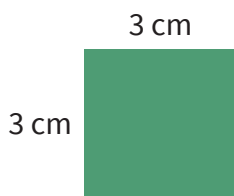
...22... cm



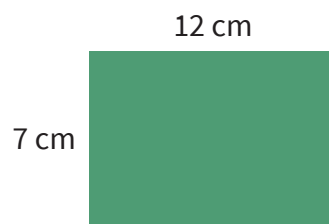
...18... cm




...26... cm



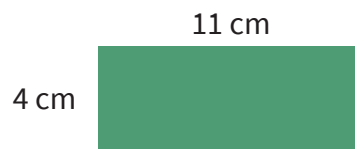
...12... cm



...38... cm



...22... cm



...30... cm