



## Welke klok hoort bij de digitale tijd? (hele halve uren en kwartieren)

### Oefening 1


1. Welke klok toont 3:15?




2. Welke klok toont 2:00?



3. Welke klok toont 2:00?




4. Welke klok toont 10:45?




## Welke klok hoort bij de digitale tijd? (hele halve uren en kwartieren)

### Oefening 2

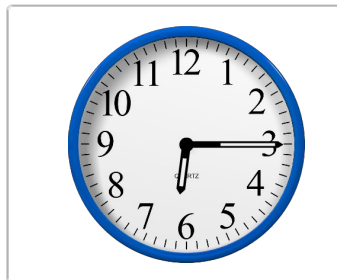
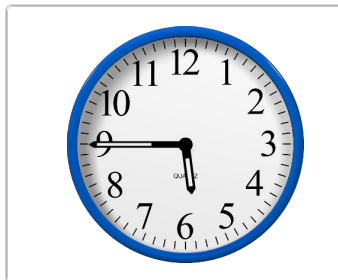
1. Welke klok toont 6:45?





2. Welke klok toont 10:30?



3. Welke klok toont 6:15?





4. Welke klok toont 10:00?





## Welke klok hoort bij de digitale tijd? (hele halve uren en kwartieren)

### Oefening 3


1. Welke klok toont 8:00?




2. Welke klok toont 10:00?



3. Welke klok toont 5:00?





4. Welke klok toont 4:30?





## Welke klok hoort bij de digitale tijd? (hele halve uren en kwartieren)

### Oefening 4



1. Welke klok toont 6:00?



2. Welke klok toont 6:00?



3. Welke klok toont 8:45?




4. Welke klok toont 9:45?




## Welke klok hoort bij de digitale tijd? (hele halve uren en kwartieren)

### Oefening 1



1. Welke klok toont 3:15?





2. Welke klok toont 2:00?



3. Welke klok toont 2:00?




4. Welke klok toont 10:45?



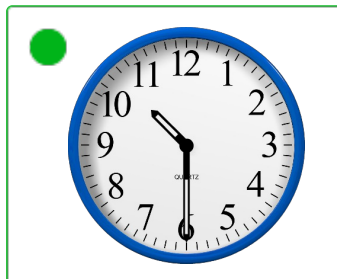
## Welke klok hoort bij de digitale tijd? (hele halve uren en kwartieren)

### Oefening 2

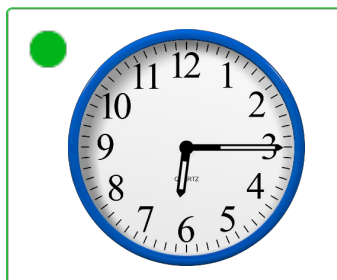
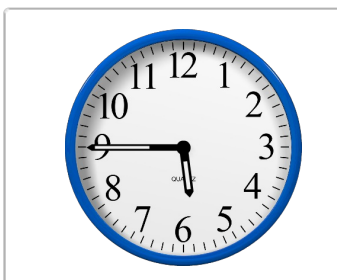

1. Welke klok toont 6:45?





2. Welke klok toont 10:30?



3. Welke klok toont 6:15?





4. Welke klok toont 10:00?





## Welke klok hoort bij de digitale tijd? (hele halve uren en kwartieren)

### Oefening 3


1. Welke klok toont 8:00?



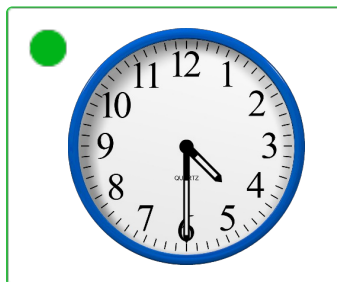
2. Welke klok toont 10:00?



3. Welke klok toont 5:00?




4. Welke klok toont 4:30?




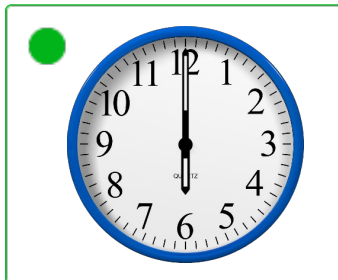
## Welke klok hoort bij de digitale tijd? (hele halve uren en kwartieren)

### Oefening 4

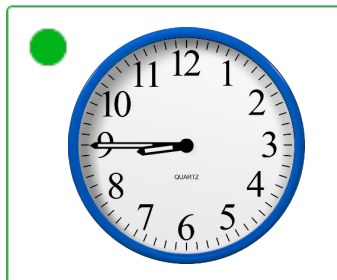

1. Welke klok toont 6:00?



2. Welke klok toont 6:00?



3. Welke klok toont 8:45?



4. Welke klok toont 9:45?

