





Welke klok hoort bij de digitale tijd? (hele en halve uren)

Oefening 1



1. Welke klok toont 1:00?




2. Welke klok toont 4:00?



3. Welke klok toont 7:00?




4. Welke klok toont 5:00?



Welke klok hoort bij de digitale tijd? (hele en halve uren)

Oefening 2

1. Welke klok toont 5:30?




2. Welke klok toont 8:30?



3. Welke klok toont 4:30?





4. Welke klok toont 7:00?





Welke klok hoort bij de digitale tijd? (hele en halve uren)

Oefening 3



1. Welke klok toont 7:00?




2. Welke klok toont 6:00?



3. Welke klok toont 1:00?




4. Welke klok toont 11:00?




Welke klok hoort bij de digitale tijd? (hele en halve uren)

Oefening 4



1. Welke klok toont 8:30?




2. Welke klok toont 4:00?



3. Welke klok toont 5:30?




4. Welke klok toont 1:00?





Welke klok hoort bij de digitale tijd? (hele en halve uren)

Oefening 1


1. Welke klok toont 1:00?




2. Welke klok toont 4:00?



3. Welke klok toont 7:00?



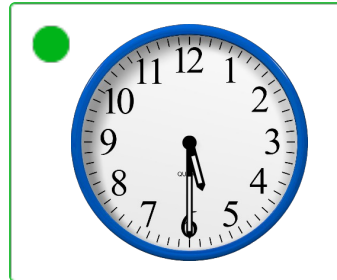

4. Welke klok toont 5:00?



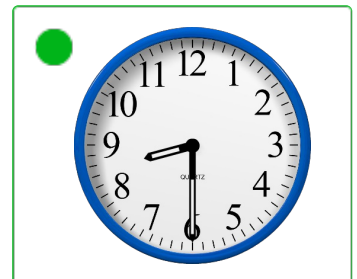
Welke klok hoort bij de digitale tijd? (hele en halve uren)

Oefening 2

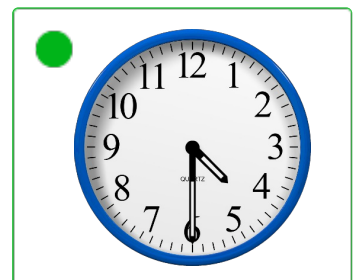
1. Welke klok toont 5:30?




2. Welke klok toont 8:30?



3. Welke klok toont 4:30?




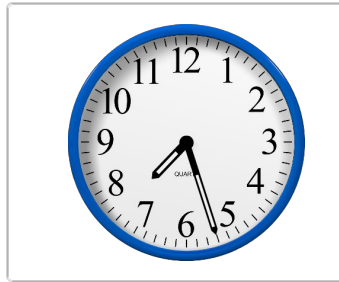

4. Welke klok toont 7:00?



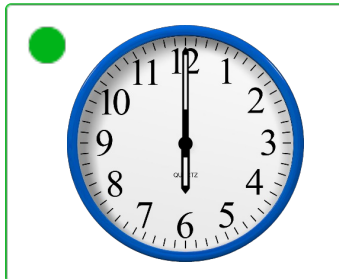
Welke klok hoort bij de digitale tijd? (hele en halve uren)

Oefening 3



1. Welke klok toont 7:00?




2. Welke klok toont 6:00?



3. Welke klok toont 1:00?





4. Welke klok toont 11:00?




Welke klok hoort bij de digitale tijd? (hele en halve uren)

Oefening 4



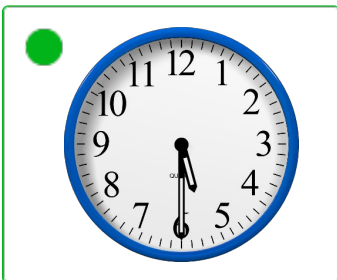
1. Welke klok toont 8:30?



2. Welke klok toont 4:00?



3. Welke klok toont 5:30?



4. Welke klok toont 1:00?

