




Welke klok hoort bij de digitale tijd? (5 voor en 10 over)

Oefening 1



1. Welke klok toont 2:30?





2. Welke klok toont 5:35?



3. Welke klok toont 6:10?



4. Welke klok toont 6:25?



Welke klok hoort bij de digitale tijd? (5 voor en 10 over)

Oefening 2



1. Welke klok toont 10:30?



2. Welke klok toont 2:35?



3. Welke klok toont 3:25?




4. Welke klok toont 10:50?





Welke klok hoort bij de digitale tijd? (5 voor en 10 over)

Oefening 3


1. Welke klok toont 8:55?




2. Welke klok toont 8:50?



3. Welke klok toont 2:30?




4. Welke klok toont 5:10?



Welke klok hoort bij de digitale tijd? (5 voor en 10 over)

Oefening 4

1. Welke klok toont 10:20?




2. Welke klok toont 4:50?



3. Welke klok toont 5:05?



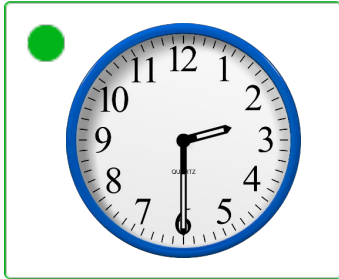
4. Welke klok toont 11:30?






Welke klok hoort bij de digitale tijd? (5 voor en 10 over)

Oefening 1

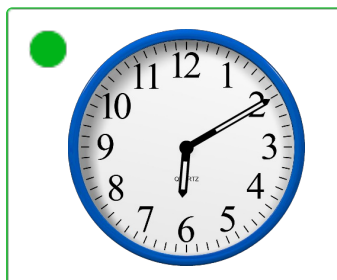


1. Welke klok toont 2:30?



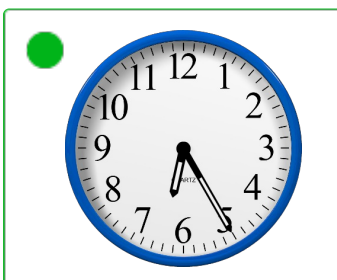

2. Welke klok toont 5:35?



3. Welke klok toont 6:10?




4. Welke klok toont 6:25?




Welke klok hoort bij de digitale tijd? (5 voor en 10 over)

Oefening 2



1. Welke klok toont 10:30?





2. Welke klok toont 2:35?



3. Welke klok toont 3:25?




4. Welke klok toont 10:50?





Welke klok hoort bij de digitale tijd? (5 voor en 10 over)

Oefening 3


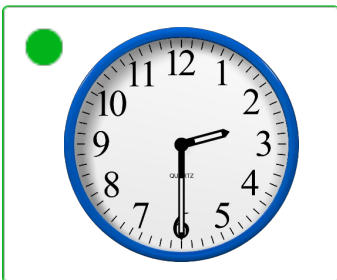
1. Welke klok toont 8:55?




2. Welke klok toont 8:50?



3. Welke klok toont 2:30?




4. Welke klok toont 5:10?




Welke klok hoort bij de digitale tijd? (5 voor en 10 over)

Oefening 4


1. Welke klok toont 10:20?



2. Welke klok toont 4:50?



3. Welke klok toont 5:05?



4. Welke klok toont 11:30?

