



## Welke klok hoort bij de digitale tijd? (hele, halve uren en kwartieren)

### Oefening 1


1. Welke klok toont 3:00?





2. Welke klok toont 6:15?



3. Welke klok toont 10:45?




4. Welke klok toont 7:00?



## Welke klok hoort bij de digitale tijd? (hele, halve uren en kwartieren)

### Oefening 2



1. Welke klok toont 6:30?





2. Welke klok toont 10:30?



3. Welke klok toont 10:30?






4. Welke klok toont 3:00?





## Welke klok hoort bij de digitale tijd? (hele, halve uren en kwartieren)

### Oefening 3

1. Welke klok toont 8:15?



2. Welke klok toont 8:45?



3. Welke klok toont 9:45?





4. Welke klok toont 7:15?





## Welke klok hoort bij de digitale tijd? (hele, halve uren en kwartieren)

### Oefening 4




1. Welke klok toont 7:30?




2. Welke klok toont 3:45?



3. Welke klok toont 11:45?





4. Welke klok toont 9:30?



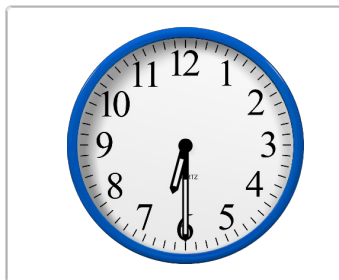
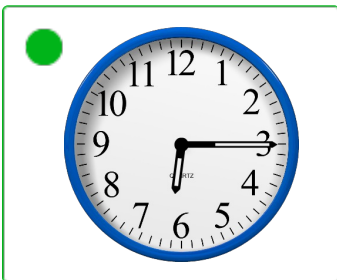
## Welke klok hoort bij de digitale tijd? (hele, halve uren en kwartieren)

### Oefening 1


1. Welke klok toont 3:00?






2. Welke klok toont 6:15?



3. Welke klok toont 10:45?



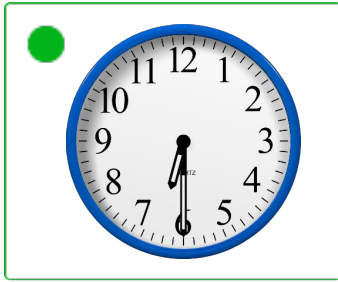
4. Welke klok toont 7:00?





## Welke klok hoort bij de digitale tijd? (hele, halve uren en kwartieren)

### Oefening 2

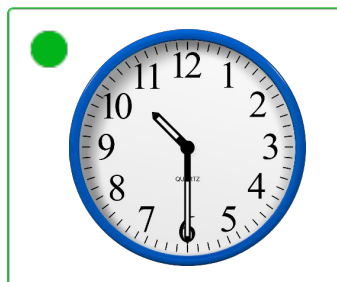

1. Welke klok toont 6:30?




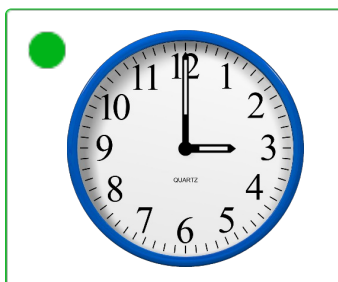

2. Welke klok toont 10:30?



3. Welke klok toont 10:30?






4. Welke klok toont 3:00?



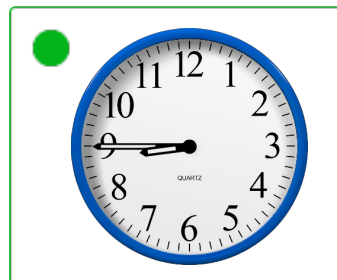


## Welke klok hoort bij de digitale tijd? (hele, halve uren en kwartieren)

### Oefening 3



1. Welke klok toont 8:15?






2. Welke klok toont 8:45?



3. Welke klok toont 9:45?



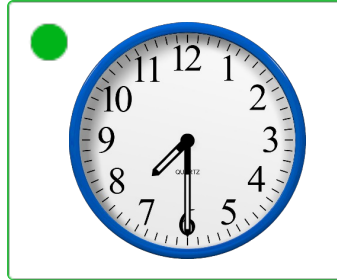

4. Welke klok toont 7:15?




## Welke klok hoort bij de digitale tijd? (hele, halve uren en kwartieren)

### Oefening 4




1. Welke klok toont 7:30?



2. Welke klok toont 3:45?



3. Welke klok toont 11:45?



4. Welke klok toont 9:30?

