




## Welke klok hoort bij de digitale tijd? (hele, halve uren en kwartieren)

### Oefening 1

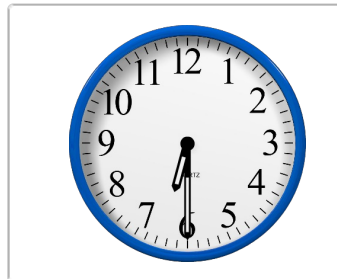
1. Welke klok toont 7:15?





2. Welke klok toont 1:00?



3. Welke klok toont 6:30?




4. Welke klok toont 8:15?



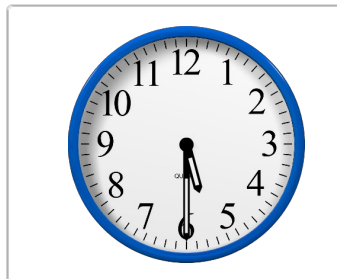
## Welke klok hoort bij de digitale tijd? (hele, halve uren en kwartieren)

### Oefening 2


1. Welke klok toont 7:30?



2. Welke klok toont 5:30?



3. Welke klok toont 4:15?




4. Welke klok toont 5:00?



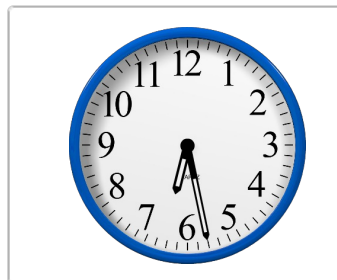
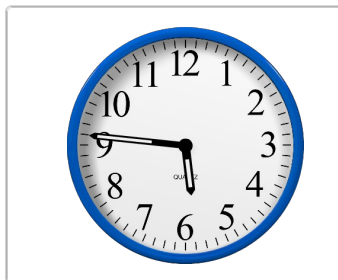

## Welke klok hoort bij de digitale tijd? (hele, halve uren en kwartieren)

### Oefening 3


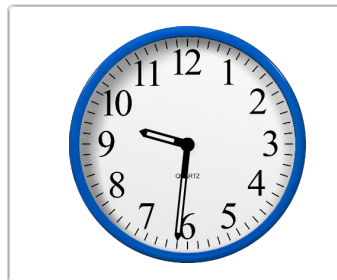

1. Welke klok toont 3:30?





2. Welke klok toont 6:15?



3. Welke klok toont 9:45?






4. Welke klok toont 3:00?




## Welke klok hoort bij de digitale tijd? (hele, halve uren en kwartieren)

### Oefening 4


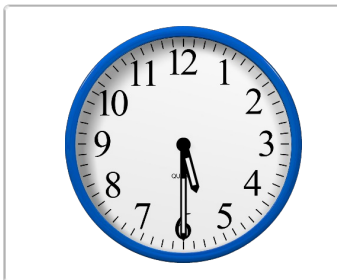
1. Welke klok toont 7:30?





2. Welke klok toont 10:30?



3. Welke klok toont 5:30?





4. Welke klok toont 2:45?




## Welke klok hoort bij de digitale tijd? (hele, halve uren en kwartieren)

### Oefening 1

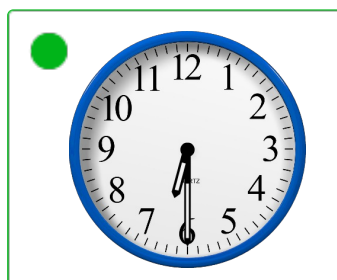

1. Welke klok toont 7:15?





2. Welke klok toont 1:00?



3. Welke klok toont 6:30?





4. Welke klok toont 8:15?



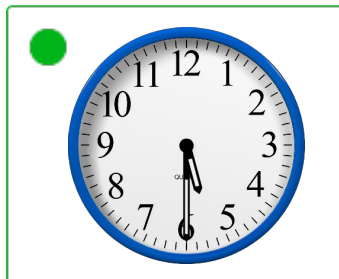
## Welke klok hoort bij de digitale tijd? (hele, halve uren en kwartieren)

### Oefening 2



1. Welke klok toont 7:30?




2. Welke klok toont 5:30?



3. Welke klok toont 4:15?



4. Welke klok toont 5:00?



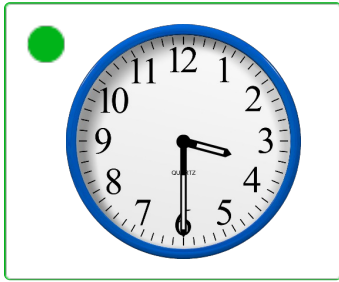




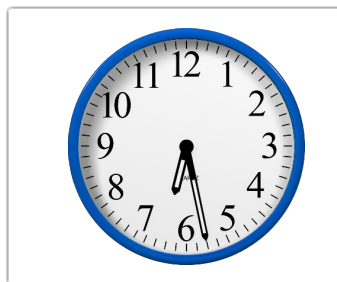
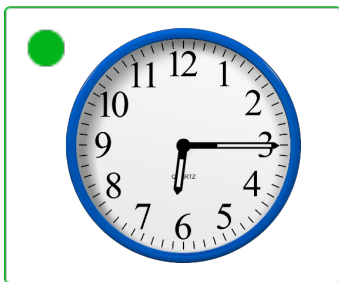
## Welke klok hoort bij de digitale tijd? (hele, halve uren en kwartieren)

### Oefening 3


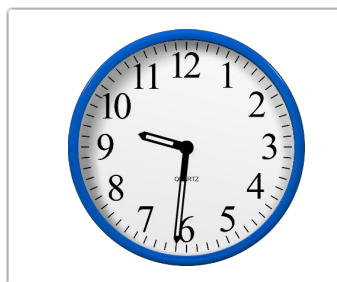
1. Welke klok toont 3:30?




2. Welke klok toont 6:15?



3. Welke klok toont 9:45?



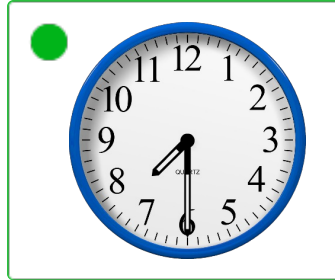

4. Welke klok toont 3:00?





## Welke klok hoort bij de digitale tijd? (hele, halve uren en kwartieren)

### Oefening 4


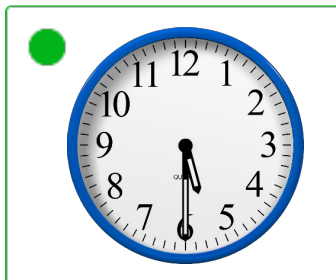
1. Welke klok toont 7:30?



2. Welke klok toont 10:30?



3. Welke klok toont 5:30?



4. Welke klok toont 2:45?

