




Welke klok hoort bij de digitale tijd? (hele en halve uren)

Oefening 1


1. Welke klok toont 7:30?




2. Welke klok toont 1:00?



3. Welke klok toont 10:00?




4. Welke klok toont 11:30?




Welke klok hoort bij de digitale tijd? (hele en halve uren)

Oefening 2



1. Welke klok toont 1:30?




2. Welke klok toont 4:30?



3. Welke klok toont 8:30?






4. Welke klok toont 9:30?





Welke klok hoort bij de digitale tijd? (hele en halve uren)

Oefening 3


1. Welke klok toont 3:00?




2. Welke klok toont 9:30?



3. Welke klok toont 1:30?




4. Welke klok toont 5:00?






Welke klok hoort bij de digitale tijd? (hele en halve uren)

Oefening 4



1. Welke klok toont 3:00?




2. Welke klok toont 7:00?



3. Welke klok toont 7:30?




4. Welke klok toont 11:30?




Welke klok hoort bij de digitale tijd? (hele en halve uren)

Oefening 1



1. Welke klok toont 7:30?



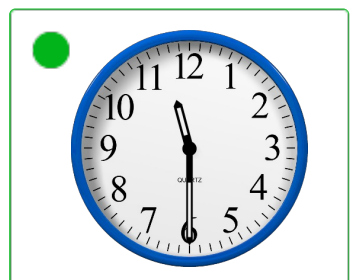

2. Welke klok toont 1:00?



3. Welke klok toont 10:00?



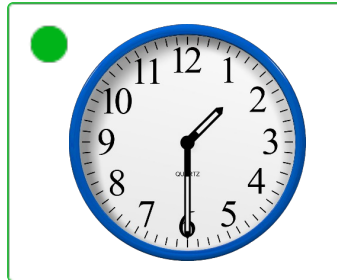
4. Welke klok toont 11:30?



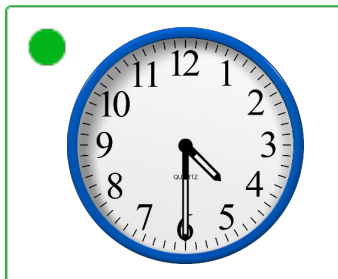
Welke klok hoort bij de digitale tijd? (hele en halve uren)

Oefening 2

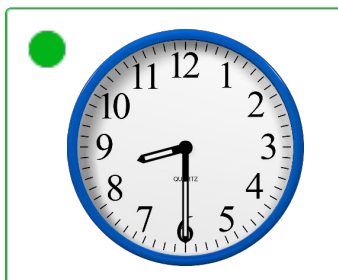
1. Welke klok toont 1:30?



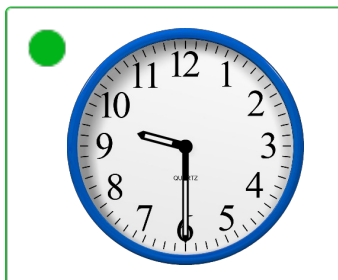
2. Welke klok toont 4:30?



3. Welke klok toont 8:30?





4. Welke klok toont 9:30?





Welke klok hoort bij de digitale tijd? (hele en halve uren)

Oefening 3


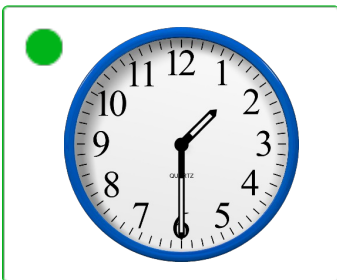
1. Welke klok toont 3:00?




2. Welke klok toont 9:30?



3. Welke klok toont 1:30?





4. Welke klok toont 5:00?




Welke klok hoort bij de digitale tijd? (hele en halve uren)

Oefening 4

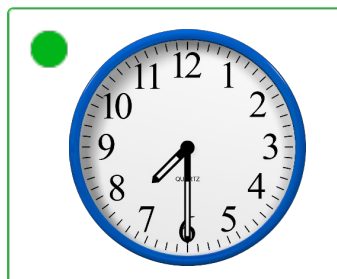
1. Welke klok toont 3:00?



2. Welke klok toont 7:00?



3. Welke klok toont 7:30?



4. Welke klok toont 11:30?

