

Welke klok hoort bij de digitale tijd? (5 voor en tien over)

Oefening 1

1. Welke klok toont 6:30?






2. Welke klok toont 8:10?



3. Welke klok toont 11:25?






4. Welke klok toont 8:15?





Welke klok hoort bij de digitale tijd? (5 voor en tien over)

Oefening 2

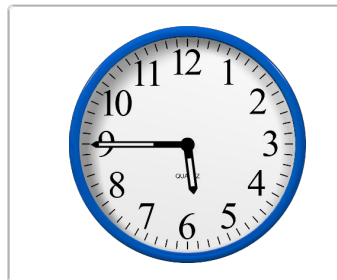
1. Welke klok toont 8:30?




2. Welke klok toont 9:25?



3. Welke klok toont 6:05?






4. Welke klok toont 2:10?




Welke klok hoort bij de digitale tijd? (5 voor en tien over)

Oefening 3

1. Welke klok toont 7:40?



2. Welke klok toont 3:15?



3. Welke klok toont 3:05?




4. Welke klok toont 3:25?






Welke klok hoort bij de digitale tijd? (5 voor en tien over)

Oefening 4



1. Welke klok toont 4:25?




2. Welke klok toont 7:45?



3. Welke klok toont 4:45?



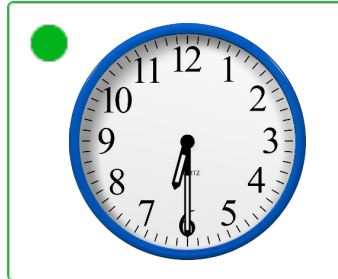
4. Welke klok toont 8:10?





Welke klok hoort bij de digitale tijd? (5 voor en tien over)

Oefening 1



1. Welke klok toont 6:30?




2. Welke klok toont 8:10?



3. Welke klok toont 11:25?



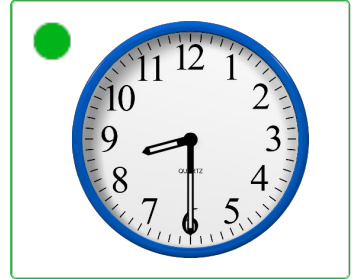



4. Welke klok toont 8:15?






Welke klok hoort bij de digitale tijd? (5 voor en tien over)

Oefening 2

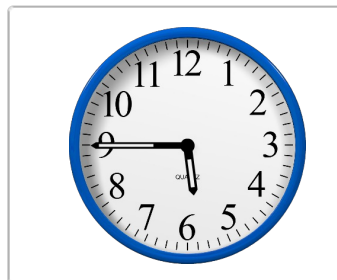

1. Welke klok toont 8:30?




2. Welke klok toont 9:25?



3. Welke klok toont 6:05?





4. Welke klok toont 2:10?






Welke klok hoort bij de digitale tijd? (5 voor en tien over)

Oefening 3


1. Welke klok toont 7:40?





2. Welke klok toont 3:15?



3. Welke klok toont 3:05?




4. Welke klok toont 3:25?





Welke klok hoort bij de digitale tijd? (5 voor en tien over)

Oefening 4



1. Welke klok toont 4:25?



2. Welke klok toont 7:45?



3. Welke klok toont 4:45?



4. Welke klok toont 8:10?

