

## Welke klok hoort bij de digitale tijd? (5 voor en 10 over)

### Oefening 1

1. Welke klok toont 11:10?





2. Welke klok toont 1:55?



3. Welke klok toont 10:00?




4. Welke klok toont 11:55?




## Welke klok hoort bij de digitale tijd? (5 voor en 10 over)

### Oefening 2

1. Welke klok toont 7:10?




2. Welke klok toont 11:15?



3. Welke klok toont 4:20?





4. Welke klok toont 1:35?




## Welke klok hoort bij de digitale tijd? (5 voor en 10 over)

### Oefening 3

1. Welke klok toont 1:40?



2. Welke klok toont 11:55?



3. Welke klok toont 6:55?





4. Welke klok toont 10:20?




## Welke klok hoort bij de digitale tijd? (5 voor en 10 over)

### Oefening 4



1. Welke klok toont 8:35?




2. Welke klok toont 10:40?



3. Welke klok toont 10:35?





4. Welke klok toont 4:00?




## Welke klok hoort bij de digitale tijd? (5 voor en 10 over)

### Oefening 1



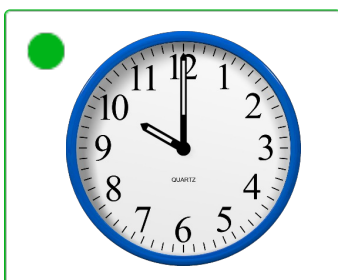
1. Welke klok toont 11:10?





2. Welke klok toont 1:55?



3. Welke klok toont 10:00?





4. Welke klok toont 11:55?




## Welke klok hoort bij de digitale tijd? (5 voor en 10 over)

### Oefening 2



1. Welke klok toont 7:10?





2. Welke klok toont 11:15?



3. Welke klok toont 4:20?






4. Welke klok toont 1:35?




## Welke klok hoort bij de digitale tijd? (5 voor en 10 over)

### Oefening 3


1. Welke klok toont 1:40?





2. Welke klok toont 11:55?



3. Welke klok toont 6:55?






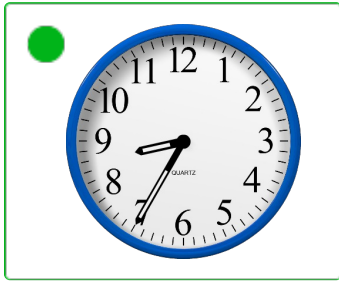
4. Welke klok toont 10:20?




## Welke klok hoort bij de digitale tijd? (5 voor en 10 over)

### Oefening 4



1. Welke klok toont 8:35?



2. Welke klok toont 10:40?



3. Welke klok toont 10:35?



4. Welke klok toont 4:00?

