



Welke klok hoort bij de digitale tijd? (5 voor en 10 over)

Oefening 1


1. Welke klok toont 10:45?



2. Welke klok toont 4:45?



3. Welke klok toont 10:55?



4. Welke klok toont 11:25?





Welke klok hoort bij de digitale tijd? (5 voor en 10 over)

Oefening 2

1. Welke klok toont 4:50?





2. Welke klok toont 2:25?



3. Welke klok toont 5:05?




4. Welke klok toont 2:50?




Welke klok hoort bij de digitale tijd? (5 voor en 10 over)

Oefening 3




1. Welke klok toont 3:45?





2. Welke klok toont 7:00?



3. Welke klok toont 4:00?





4. Welke klok toont 3:00?




Welke klok hoort bij de digitale tijd? (5 voor en 10 over)

Oefening 4

1. Welke klok toont 6:40?




2. Welke klok toont 6:10?



3. Welke klok toont 10:40?





4. Welke klok toont 3:55?




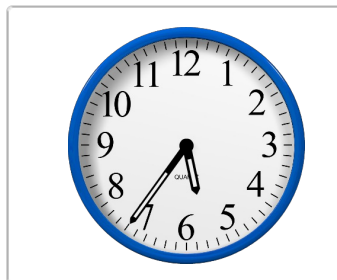

Welke klok hoort bij de digitale tijd? (5 voor en 10 over)

Oefening 1


1. Welke klok toont 10:45?





2. Welke klok toont 4:45?



3. Welke klok toont 10:55?




4. Welke klok toont 11:25?







Welke klok hoort bij de digitale tijd? (5 voor en 10 over)

Oefening 2


1. Welke klok toont 4:50?






2. Welke klok toont 2:25?



3. Welke klok toont 5:05?




4. Welke klok toont 2:50?






Welke klok hoort bij de digitale tijd? (5 voor en 10 over)

Oefening 3




1. Welke klok toont 3:45?





2. Welke klok toont 7:00?



3. Welke klok toont 4:00?





4. Welke klok toont 3:00?




Welke klok hoort bij de digitale tijd? (5 voor en 10 over)

Oefening 4


1. Welke klok toont 6:40?



2. Welke klok toont 6:10?



3. Welke klok toont 10:40?



4. Welke klok toont 3:55?

