

## Hoeveel vroeger is het? (minuten) [2]

### Oefening 1

1.    
uur en                  minuten  
.....

2.    
uur en                  minuten  
.....

3.    
uur en                  minuten  
.....

4.    
uur en                  minuten  
.....

5.    
uur en                  minuten  
.....

### Oefening 2

1.    
uur en                  minuten  
.....

2.    
uur en                  minuten  
.....


3.    
uur en                  minuten  
.....

4.    
uur en                  minuten  
.....


5.    
uur en                  minuten  
.....

## Antwoorden: Hoeveel vroeger is het? (minuten) [2]

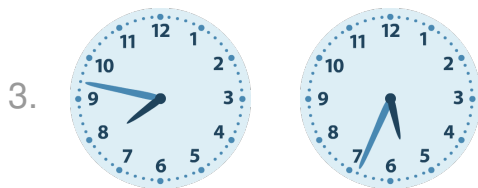
### Oefening 1




0 uur en 50 minuten




7 uur en 24 minuten



2 uur en 13 minuten

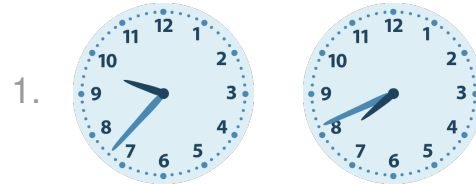


0 uur en 47 minuten




1 uur en 0 minuten


### Oefening 2




1 uur en 56 minuten




3 uur en 22 minuten



3 uur en 12 minuten



4 uur en 20 minuten



2 uur en 40 minuten