

## Hoeveel vroeger is het? (minuten) [1]

### Oefening 1

1.    
uur en                  minuten  
.....

2.    
uur en                  minuten  
.....

3.    
uur en                  minuten  
.....

4.    
uur en                  minuten  
.....

5.    
uur en                  minuten  
.....

### Oefening 2

1.    
uur en                  minuten  
.....

2.    
uur en                  minuten  
.....


3.    
uur en                  minuten  
.....

4.    
uur en                  minuten  
.....


5.    
uur en                  minuten  
.....

# Antwoorden: Hoeveel vroeger is het? (minuten) [1]


## Oefening 1



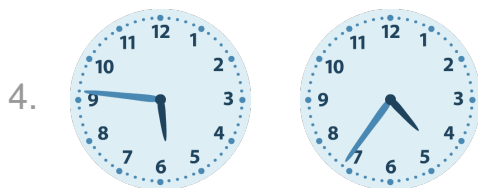
2 uur en 50 minuten




1 uur en 48 minuten



3 uur en 4 minuten




1 uur en 10 minuten




4 uur en 57 minuten

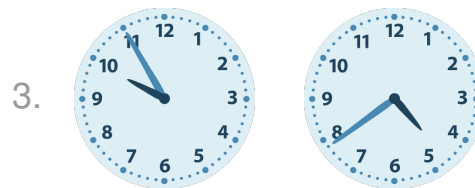
## Oefening 2



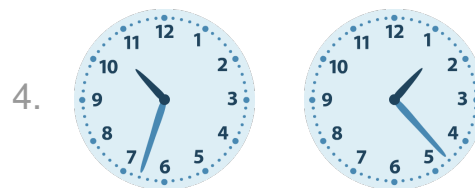
6 uur en 41 minuten



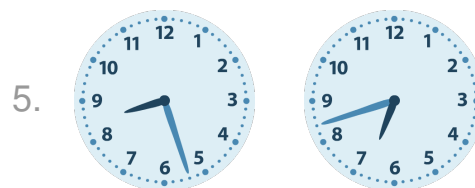
10 uur en 11 minuten



5 uur en 16 minuten



9 uur en 10 minuten



1 uur en 45 minuten