

Hoeveel vroeger is het? (minuten) [1]

Oefening 1

1.  

uur en minuten

.....

2.  

uur en minuten

.....

3.  

uur en minuten

.....

4.  

uur en minuten

.....

5.  

uur en minuten

.....

Oefening 2

1.  

uur en minuten

.....

2.  

uur en minuten

.....

3.  

uur en minuten

.....

4.  

uur en minuten

.....


5.  

uur en minuten

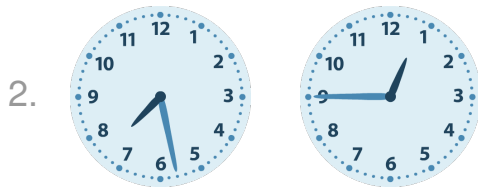
.....

Antwoorden: Hoeveel vroeger is het? (minuten) [1]


Oefening 1




0 uur en 7 minuten




6 uur en 43 minuten



3 uur en 56 minuten

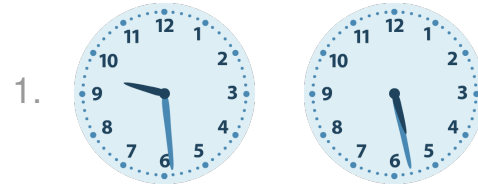


3 uur en 19 minuten

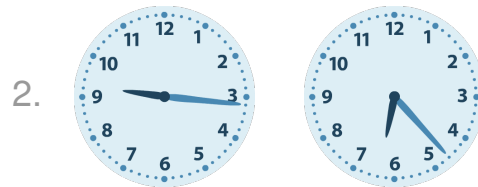


1 uur en 5 minuten

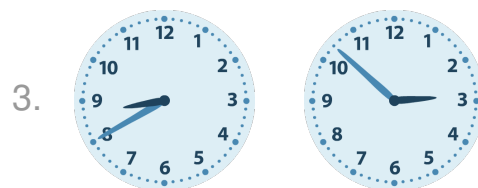
Oefening 2



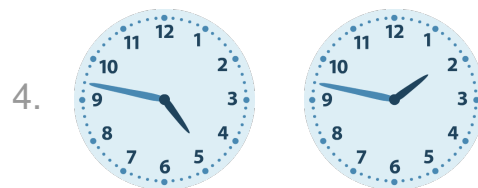
4 uur en 1 minuten




2 uur en 53 minuten



5 uur en 48 minuten



3 uur en 0 minuten



4 uur en 39 minuten