

Hoeveel vroeger is het? (minuten) [1]

Oefening 1

1.  
..... uur en minuten

2.  
..... uur en minuten

3.  
..... uur en minuten

4.  
..... uur en minuten

5.  
..... uur en minuten

Oefening 2

1.  
..... uur en minuten

2.  
..... uur en minuten

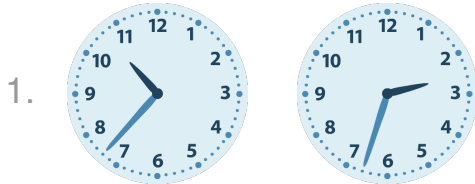
3.  
..... uur en minuten

4.  
..... uur en minuten


5.  
..... uur en minuten

Antwoorden: Hoeveel vroeger is het? (minuten) [1]


Oefening 1




8 uur en 4 minuten




11 uur en 16 minuten



1 uur en 38 minuten




8 uur en 33 minuten




6 uur en 45 minuten


Oefening 2



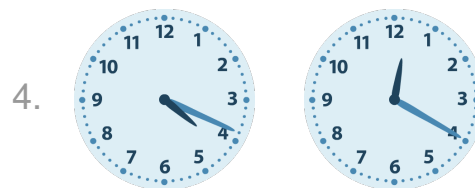
3 uur en 11 minuten



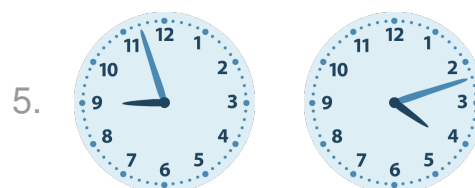
2 uur en 43 minuten



4 uur en 31 minuten



3 uur en 59 minuten



4 uur en 45 minuten