

Hoeveel vroeger is het? (hele, halve uren en kwartieren) [2]

Oefening 1

1.  
uur en minuten
.....

2.  
uur en minuten
.....

3.  
uur en minuten
.....

4.  
uur en minuten
.....

5.  
uur en minuten
.....

Oefening 2

1.  
uur en minuten
.....

2.  
uur en minuten
.....


3.  
uur en minuten
.....

4.  
uur en minuten
.....


5.  
uur en minuten
.....

Antwoorden: Hoeveel vroeger is het? (hele, halve uren en kwartieren) [2]


Oefening 1




5 uur en 45 minuten




1 uur en 30 minuten



9 uur en 0 minuten




3 uur en 15 minuten

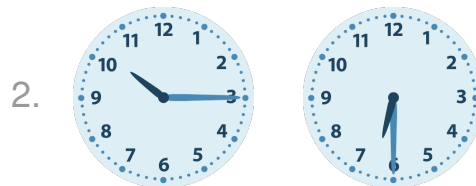


5 uur en 0 minuten

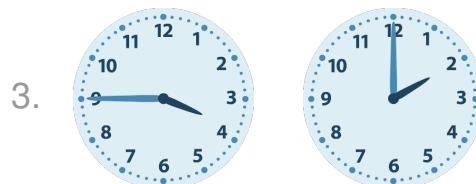
Oefening 2




1 uur en 0 minuten




3 uur en 45 minuten



1 uur en 45 minuten



8 uur en 30 minuten



0 uur en 30 minuten

