

Hoeveel vroeger is het? (hele, halve uren en kwartieren) [1]

Oefening 1

1.  

uur en minuten

.....

2.  

uur en minuten

.....

3.  

uur en minuten

.....

4.  

uur en minuten

.....

5.  

uur en minuten

.....

Oefening 2

1.  

uur en minuten

.....

2.  

uur en minuten

.....

3.  

uur en minuten

.....

4.  

uur en minuten

.....


5.  

uur en minuten


.....

Antwoorden: Hoeveel vroeger is het? (hele, halve uren en kwartieren) [1]


Oefening 1




1 uur en 45 minuten




1 uur en 30 minuten



0 uur en 15 minuten

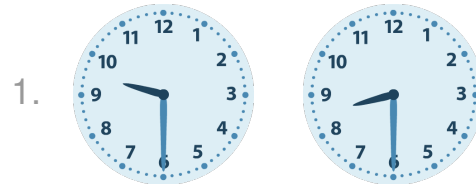


5 uur en 0 minuten

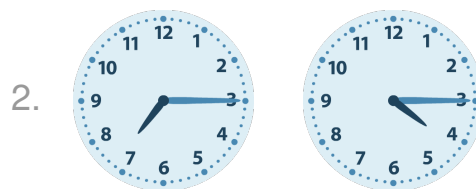


6 uur en 30 minuten


Oefening 2




1 uur en 0 minuten




3 uur en 0 minuten



2 uur en 30 minuten



3 uur en 30 minuten



5 uur en 45 minuten

