

# Hoeveel vroeger is het? (hele en halve uren)

## Oefening 1

1.  

uur en                  minuten

.....

2.  

uur en                  minuten

.....

3.  

uur en                  minuten

.....

4.  

uur en                  minuten

.....

5.  

uur en                  minuten

.....

## Oefening 2

1.  

uur en                  minuten

.....

2.  

uur en                  minuten

.....

3.  

uur en                  minuten

.....

4.  

uur en                  minuten

.....


5.  

uur en                  minuten


.....

# Antwoorden: Hoeveel vroeger is het? (hele en halve uren)


## Oefening 1




11 uur en 0 minuten




0 uur en 30 minuten



7 uur en 0 minuten




6 uur en 0 minuten

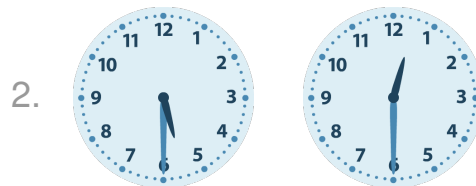


2 uur en 0 minuten


## Oefening 2




0 uur en 30 minuten




5 uur en 0 minuten



7 uur en 0 minuten



5 uur en 30 minuten



6 uur en 0 minuten

