

Hoeveel vroeger is het? (hele en halve uren)

Oefening 1

1.  

uur en minuten

.....

2.  

uur en minuten

.....

3.  

uur en minuten

.....

4.  

uur en minuten

.....

5.  

uur en minuten

.....

Oefening 2

1.  

uur en minuten

.....

2.  

uur en minuten

.....

3.  

uur en minuten

.....

4.  

uur en minuten

.....

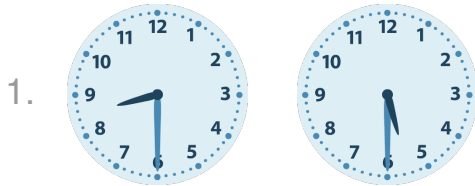
5.  

uur en minuten


.....

Antwoorden: Hoeveel vroeger is het? (hele en halve uren)


Oefening 1




3 uur en 0 minuten




2 uur en 30 minuten



8 uur en 0 minuten

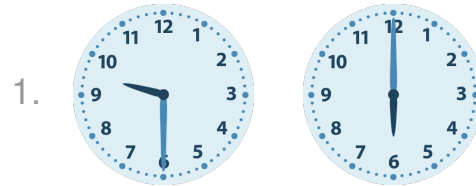


8 uur en 30 minuten




5 uur en 0 minuten

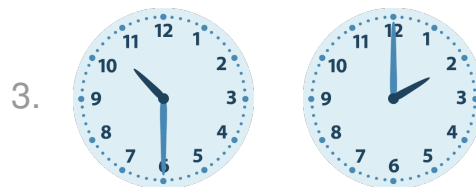
Oefening 2




3 uur en 30 minuten




6 uur en 30 minuten



8 uur en 30 minuten



7 uur en 0 minuten



2 uur en 30 minuten

