

Hoeveel vroeger is het? (hele en halve uren) [1]

Oefening 1

1.  
uur en minuten
.....

2.  
uur en minuten
.....

3.  
uur en minuten
.....

4.  
uur en minuten
.....

5.  
uur en minuten
.....

Oefening 2

1.  
uur en minuten
.....

2.  
uur en minuten
.....


3.  
uur en minuten
.....

4.  
uur en minuten
.....


5.  
uur en minuten
.....

Antwoorden: Hoeveel vroeger is het? (hele en halve uren) [1]


Oefening 1




1 uur en 0 minuten




2 uur en 0 minuten



0 uur en 30 minuten




1 uur en 0 minuten




1 uur en 30 minuten


Oefening 2




3 uur en 0 minuten




1 uur en 0 minuten



4 uur en 0 minuten



9 uur en 0 minuten



6 uur en 30 minuten

