

# Hoeveel vroeger is het? (hele en halve uren)

## Oefening 1

1.  

uur en          minuten

.....

2.  

uur en          minuten

.....

3.  

uur en          minuten

.....

4.  

uur en          minuten

.....

5.  

uur en          minuten

.....

## Oefening 2

1.  

uur en          minuten

.....

2.  

uur en          minuten

.....

3.  

uur en          minuten

.....

4.  

uur en          minuten

.....


5.  

uur en          minuten


.....

# Antwoorden: Hoeveel vroeger is het? (hele en halve uren)


## Oefening 1




2 uur en 30 minuten




1 uur en 30 minuten



5 uur en 0 minuten




7 uur en 30 minuten

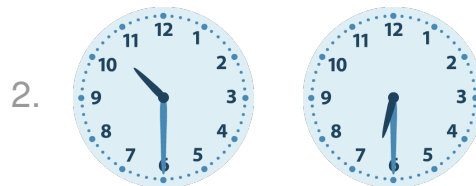


9 uur en 30 minuten

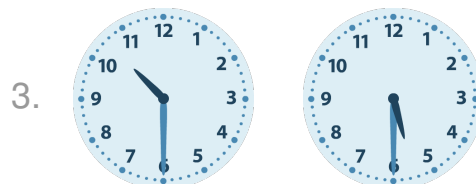
## Oefening 2



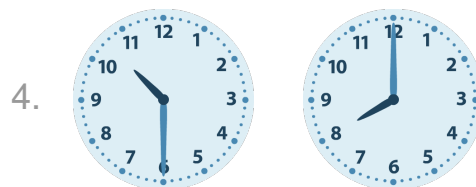
6 uur en 30 minuten




4 uur en 0 minuten



5 uur en 0 minuten



2 uur en 30 minuten



2 uur en 0 minuten

