

## Hoeveel later is het? (minuten) [2]

### Oefening 1

1.    
uur en                  minuten  
.....

2.    
uur en                  minuten  
.....

3.    
uur en                  minuten  
.....

4.    
uur en                  minuten  
.....

5.    
uur en                  minuten  
.....

### Oefening 2

1.    
uur en                  minuten  
.....

2.    
uur en                  minuten  
.....

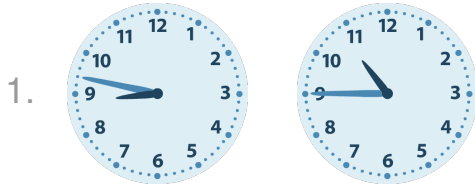
3.    
uur en                  minuten  
.....

4.    
uur en                  minuten  
.....


5.    
uur en                  minuten  
.....

## Antwoorden: Hoeveel later is het? (minuten) [2]

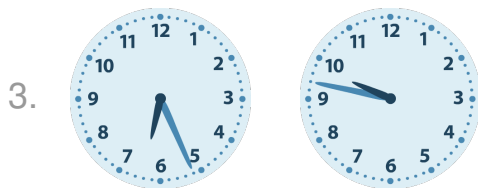
### Oefening 1




1 uur en 58 minuten




3 uur en 22 minuten



3 uur en 21 minuten

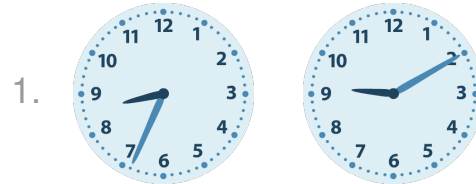


1 uur en 11 minuten

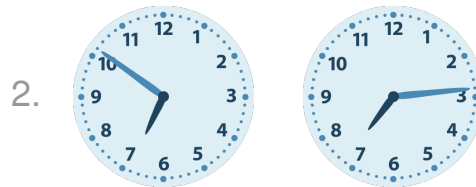


5 uur en 37 minuten

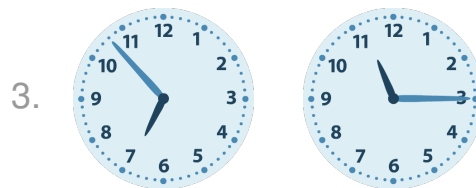
### Oefening 2




0 uur en 36 minuten




0 uur en 23 minuten



4 uur en 22 minuten



9 uur en 45 minuten



4 uur en 7 minuten