

# Hoeveel later is het? (hele, halve uren en kwartieren)

## [2]

### Oefening 1

1.  

uur en                      minuten

.....

2.  

uur en                      minuten

.....

3.  

uur en                      minuten

.....

4.  

uur en                      minuten

.....

5.  

uur en                      minuten

.....

### Oefening 2

1.  

uur en                      minuten

.....

2.  

uur en                      minuten

.....

3.  

uur en                      minuten

.....

4.  

uur en                      minuten

.....


5.  

uur en                      minuten


.....

# Antwoorden: Hoeveel later is het? (hele, halve uren en kwartieren) [2]


## Oefening 1




5 uur en 15 minuten




3 uur en 15 minuten



1 uur en 15 minuten




2 uur en 0 minuten




2 uur en 0 minuten


## Oefening 2



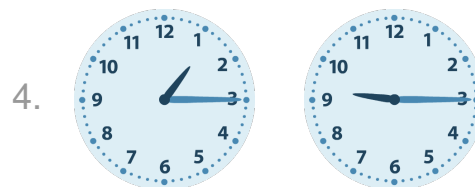
2 uur en 0 minuten




2 uur en 30 minuten



1 uur en 0 minuten



8 uur en 0 minuten



2 uur en 15 minuten

