

# Hoeveel later is het? (hele, halve uren en kwartieren)

## [2]

### Oefening 1

1.  

uur en                  minuten

.....

2.  

uur en                  minuten

.....

3.  

uur en                  minuten

.....

4.  

uur en                  minuten

.....

5.  

uur en                  minuten

.....

### Oefening 2

1.  

uur en                  minuten

.....

2.  

uur en                  minuten

.....

3.  

uur en                  minuten

.....

4.  

uur en                  minuten

.....


5.  

uur en                  minuten


.....

## Antwoorden: Hoeveel later is het? (hele, halve uren en kwartieren) [2]


### Oefening 1




0 uur en 30 minuten




9 uur en 15 minuten



2 uur en 15 minuten




4 uur en 15 minuten

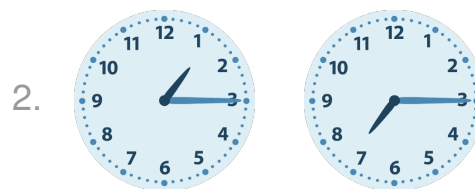


2 uur en 30 minuten


### Oefening 2



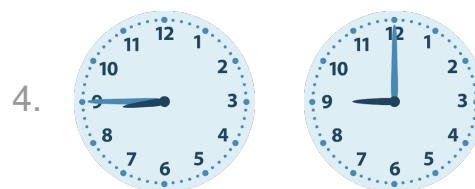
4 uur en 15 minuten




6 uur en 0 minuten



7 uur en 0 minuten



0 uur en 15 minuten



4 uur en 30 minuten

