

Hoeveel later is het? (hele, halve uren en kwartieren)

[2]

Oefening 1

1.  

uur en minuten

.....

2.  

uur en minuten

.....

3.  

uur en minuten

.....

4.  

uur en minuten

.....

5.  

uur en minuten

.....

Oefening 2

1.  

uur en minuten

.....

2.  

uur en minuten

.....

3.  

uur en minuten

.....

4.  

uur en minuten

.....


5.  

uur en minuten


.....

Antwoorden: Hoeveel later is het? (hele, halve uren en kwartieren) [2]


Oefening 1




2 uur en 45 minuten




7 uur en 30 minuten



9 uur en 45 minuten




4 uur en 0 minuten

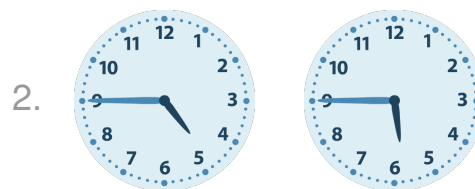


9 uur en 0 minuten


Oefening 2




1 uur en 30 minuten




1 uur en 0 minuten



0 uur en 15 minuten



0 uur en 30 minuten



1 uur en 0 minuten

