

# Hoeveel later is het? (hele, halve uren en kwartieren)

## [1]

### Oefening 1

1.  

uur en                  minuten

.....

2.  

uur en                  minuten

.....

3.  

uur en                  minuten

.....

4.  

uur en                  minuten

.....

5.  

uur en                  minuten

.....

### Oefening 2

1.  

uur en                  minuten

.....

2.  

uur en                  minuten

.....

3.  

uur en                  minuten

.....

4.  

uur en                  minuten

.....


5.  

uur en                  minuten


.....

# Antwoorden: Hoeveel later is het? (hele, halve uren en kwartieren) [1]


## Oefening 1




7 uur en 0 minuten




7 uur en 15 minuten



3 uur en 30 minuten




1 uur en 0 minuten

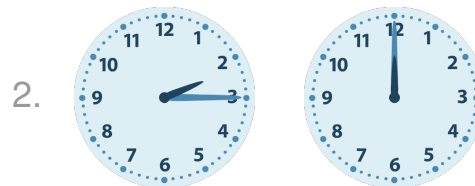


10 uur en 30 minuten


## Oefening 2



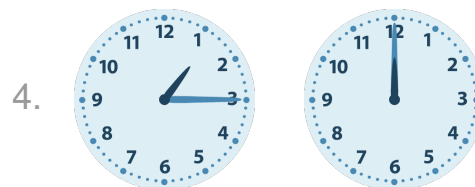
8 uur en 45 minuten




9 uur en 45 minuten



2 uur en 0 minuten



10 uur en 45 minuten



11 uur en 30 minuten

