

## Hoeveel later is het? (hele en halve uren)

### Oefening 1

1.  

uur en                  minuten

.....

2.  

uur en                  minuten

.....

3.  

uur en                  minuten

.....

4.  

uur en                  minuten

.....

5.  

uur en                  minuten

.....

### Oefening 2

1.  

uur en                  minuten

.....

2.  

uur en                  minuten

.....

3.  

uur en                  minuten

.....

4.  

uur en                  minuten

.....


5.  

uur en                  minuten

.....

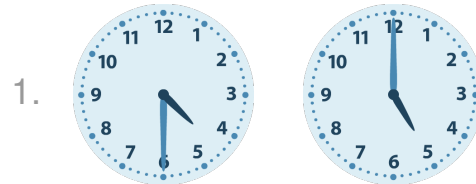
# Antwoorden: Hoeveel later is het? (hele en halve uren)

## Oefening 1




6 uur en 0 minuten


## Oefening 2




0 uur en 30 minuten




8 uur en 0 minuten




1 uur en 30 minuten




2 uur en 0 minuten




11 uur en 0 minuten




8 uur en 0 minuten



4 uur en 0 minuten



0 uur en 30 minuten



2 uur en 30 minuten

