

## Hoeveel later is het? (hele en halve uren) [2]

### Oefening 1

1.  

uur en                  minuten

.....

2.  

uur en                  minuten

.....

3.  

uur en                  minuten

.....

4.  

uur en                  minuten

.....

5.  

uur en                  minuten

.....

### Oefening 2

1.  

uur en                  minuten

.....

2.  

uur en                  minuten

.....

3.  

uur en                  minuten

.....

4.  

uur en                  minuten

.....

5.  

uur en                  minuten


.....

# Antwoorden: Hoeveel later is het? (hele en halve uren) [2]


## Oefening 1




6 uur en 30 minuten




5 uur en 30 minuten



1 uur en 30 minuten




1 uur en 0 minuten




7 uur en 30 minuten


## Oefening 2




10 uur en 30 minuten




0 uur en 30 minuten



4 uur en 0 minuten



5 uur en 30 minuten



5 uur en 30 minuten

