



Naam:


Hoeveel samen? Schrijf het juiste bedrag op.


 +
 
 = € 7




 +
 
 = €


 +
 
 = €


 +
 
 = €


 +
 
 = €


 +
 
 = €


 +
 
 = €


 +
 
 = €





Hoeveel samen? Schrijf het juiste bedrag op.

$$\begin{array}{ccc}
 \text{5€ banknote} & + & \text{2€ coin} \\
 & & = \text{€ } 7
 \end{array}$$

$$\begin{array}{ccc}
 \text{10€ banknote} & + & \text{5€ banknote} \\
 & & = \text{€ } 15
 \end{array}$$

$$\begin{array}{ccc}
 \text{2€ coin, 2€ coin, 1€ coin} & + & \text{2€ coin, 1€ coin} \\
 & & = \text{€ } 8
 \end{array}$$

$$\begin{array}{ccc}
 \text{10€ banknote} & + & \text{50 cent coin} \\
 & & = \text{€ } 10,50
 \end{array}$$

$$\begin{array}{ccc}
 \text{2€ coin, 2€ coin, 2€ coin} & + & \text{2€ coin, 2€ coin, 2€ coin} \\
 & & = \text{€ } 12
 \end{array}$$

$$\begin{array}{ccc}
 \text{2€ coin, 1€ coin} & + & \text{50 cent coin} \\
 & & = \text{€ } 3,50
 \end{array}$$

$$\begin{array}{ccc}
 \text{5€ banknote} & + & \text{50 cent coin} \\
 & & = \text{€ } 5,50
 \end{array}$$

$$\begin{array}{ccc}
 \text{10€ banknote} & + & \text{1€ coin, 50 cent coin} \\
 & & = \text{€ } 11,50
 \end{array}$$

