

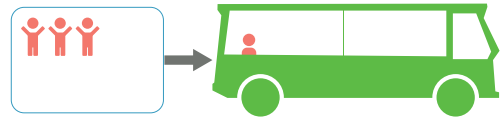
Naam:

Groep:

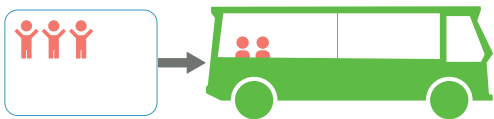
Kinderen stappen in de bus. Hoeveel kinderen zitten er nu in de bus?
Schrijf de som op.



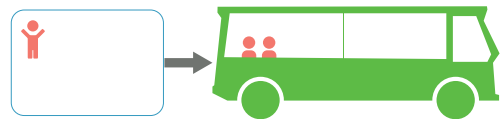
..... + =



..... + =



..... + =



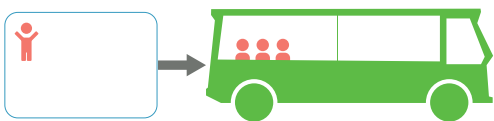
..... + =



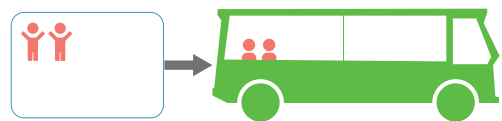
..... + =




..... + =



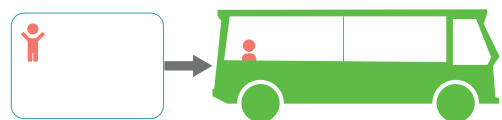
..... + =



..... + =



..... + =



..... + =

Bussommen tot en met 5 [1]

Kinderen stappen in de bus. Hoeveel kinderen zitten er nu in de bus?

Schrijf de som op.



$$2 + 1 = 3$$



$$3 + 1 = 4$$



$$3 + 2 = 5$$



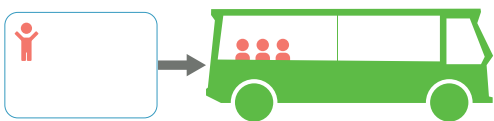
$$1 + 2 = 3$$



$$5 + 0 = 5$$




$$4 + 0 = 4$$



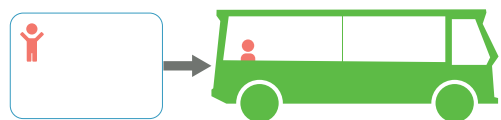
$$1 + 3 = 4$$



$$2 + 2 = 4$$



$$4 + 1 = 5$$



$$1 + 1 = 2$$