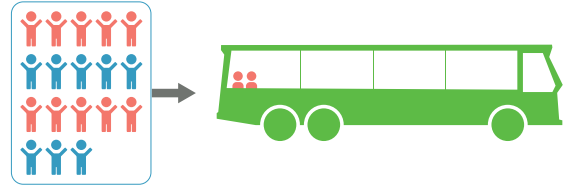
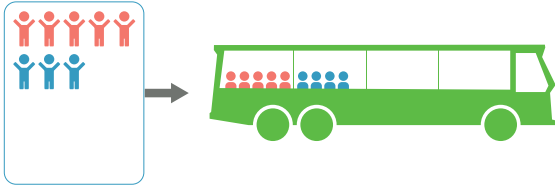


Naam: .....

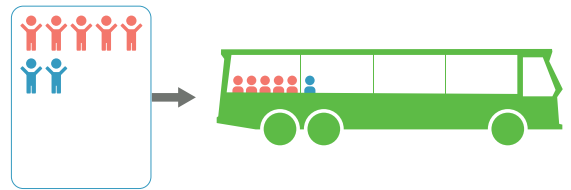
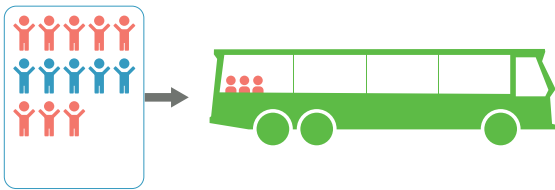
Groep: .....

**Kinderen stappen in de bus. Hoeveel kinderen zitten er nu in de bus? Schrijf de som op.**



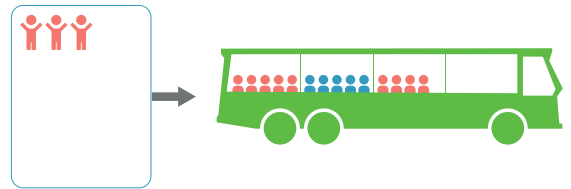
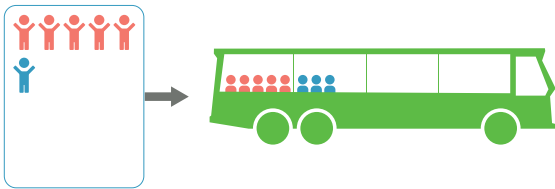
..... + ..... = .....

..... + ..... = .....



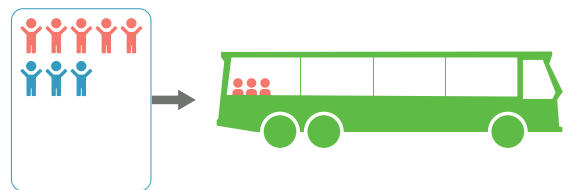
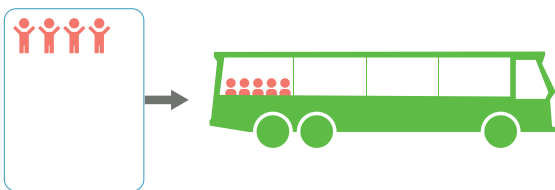
..... + ..... = .....

..... + ..... = .....



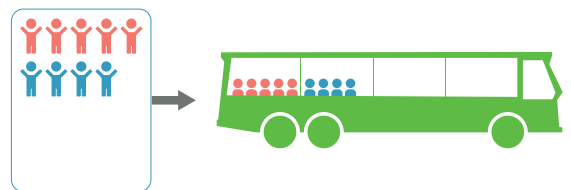
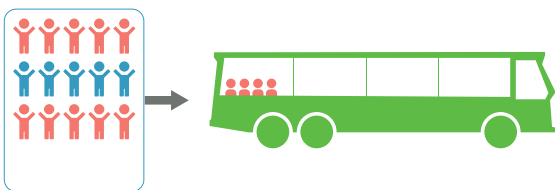
..... + ..... = .....

..... + ..... = .....



..... + ..... = .....

..... + ..... = .....

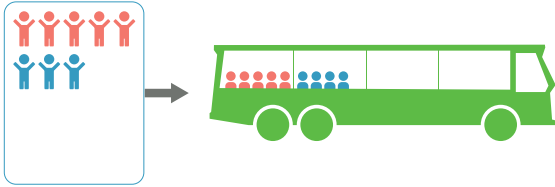


..... + ..... = .....

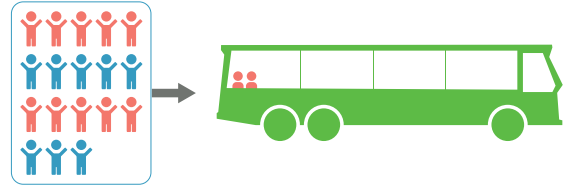
..... + ..... = .....

### Bussommen tot en met 20 [1]

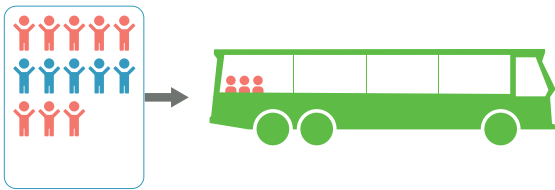
Kinderen stappen in de bus. Hoeveel kinderen zitten er nu in de bus? Schrijf de som op.



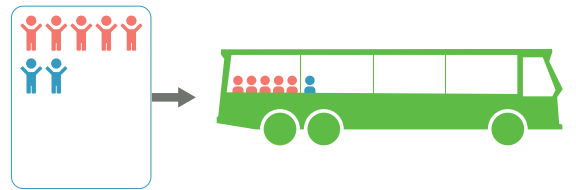
$$8 + 9 = 17$$



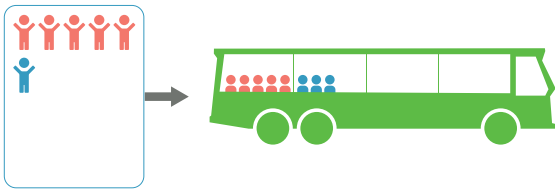
$$18 + 2 = 20$$




$$13 + 3 = 16$$



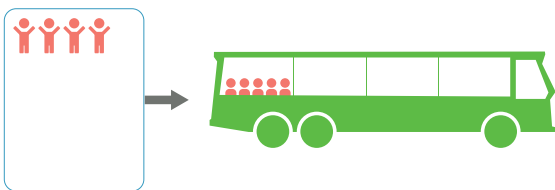
$$7 + 6 = 13$$



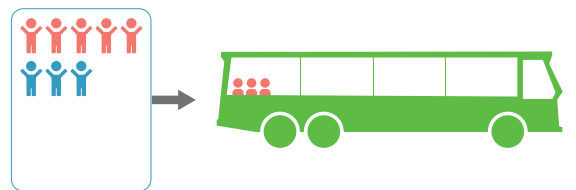
$$6 + 8 = 14$$



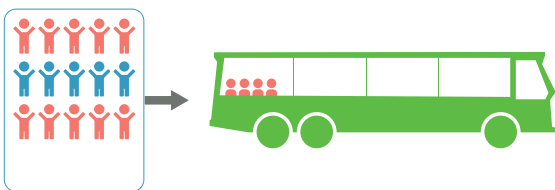
$$3 + 14 = 17$$



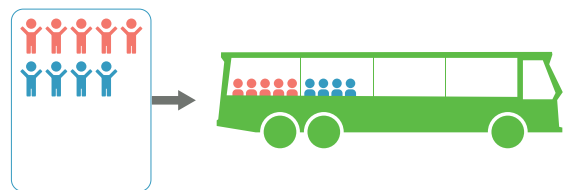
$$4 + 5 = 9$$



$$8 + 3 = 11$$



$$15 + 4 = 19$$



$$9 + 9 = 18$$