


Naam:



Groep:

Kinderen stappen in de bus. Hoeveel kinderen zitten er nu in de bus? Schrijf de som op.



..... + =

..... + =



..... + =

..... + =




..... + =

..... + =



..... + =


..... + =




..... + =

..... + =

Kinderen stappen in de bus. Hoeveel kinderen zitten er nu in de bus? Schrijf de som op.




$$6 + 6 = 12$$



$$2 + 8 = 10$$



$$4 + 4 = 8$$



$$11 + 1 = 12$$



$$9 + 1 = 10$$




$$3 + 2 = 5$$




$$1 + 2 = 3$$



$$7 + 0 = 7$$



$$5 + 6 = 11$$



$$4 + 5 = 9$$