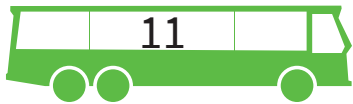


Naam:

Groep:

Kinderen stappen uit de bus. Hoeveel kinderen zitten er nog in de bus?



→ 5



→ 3



→ 6



→ 7



→ 3



→ 4



→ 4



→ 2



→ 9



→ 6



→ 12



→ 1

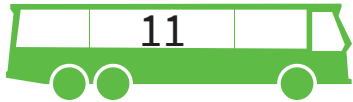


→ 10



→ 5

Kinderen stappen uit de bus. Hoeveel kinderen zitten er nog in de bus?



$11 \rightarrow 5$

6



$20 \rightarrow 3$

17



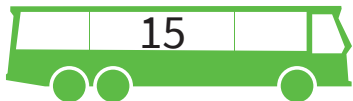
$18 \rightarrow 6$

12



$12 \rightarrow 7$

5



$15 \rightarrow 3$

12



$17 \rightarrow 4$

13



$12 \rightarrow 4$

8



$15 \rightarrow 2$

13



$19 \rightarrow 9$

10



$20 \rightarrow 6$

14



$16 \rightarrow 12$

4



$14 \rightarrow 1$

13



$13 \rightarrow 10$

3



$10 \rightarrow 5$

5